

ORDERING GEOLOGIC EVENTS

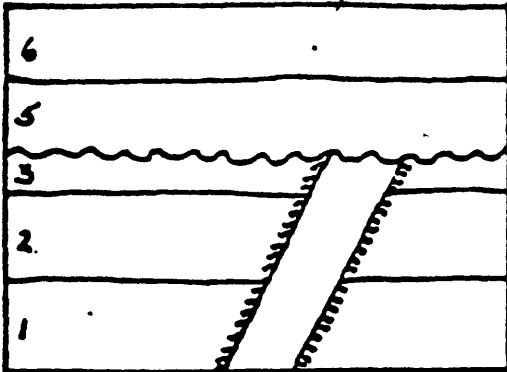
Name: _____

Period: _____

In each of the following cross-sections, correctly identify the proper order

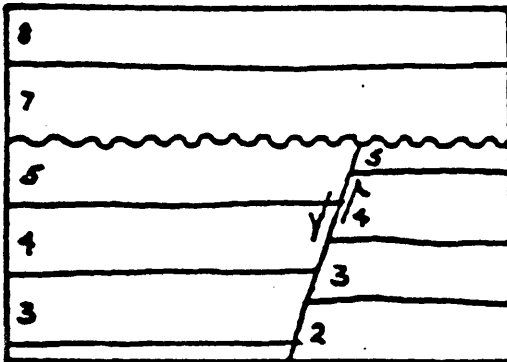
geologic events: *Deposition, folding, faulting, erosion, uplift, tilting, intrusion*

A.

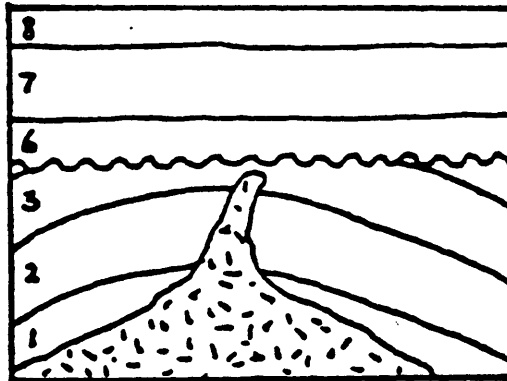


- 6.
- 5.
- 4.
- 3.
- 2.
- 1.

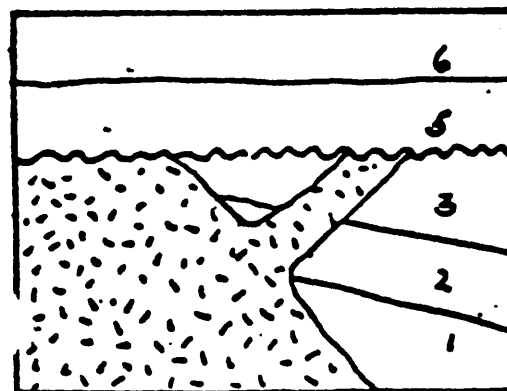
B.



- 6.
- 5.
- 4.
- 3.
- 2.
- 1.



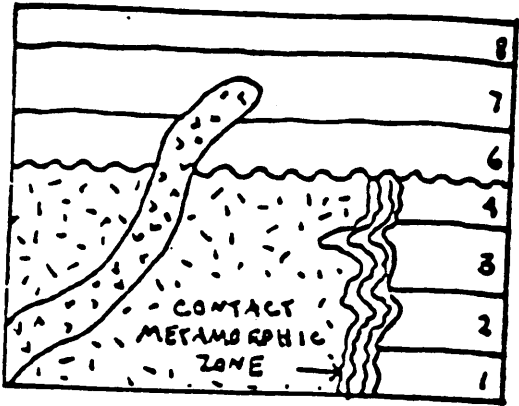
- 6.
- 5.
- 4.
- 3.
- 2.
- 1.



- 6.
- 5.
- 4.
- 3.
- 2.
- 1.

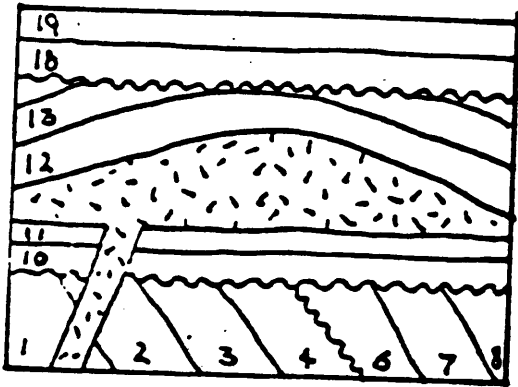
- this is the other side -

E.



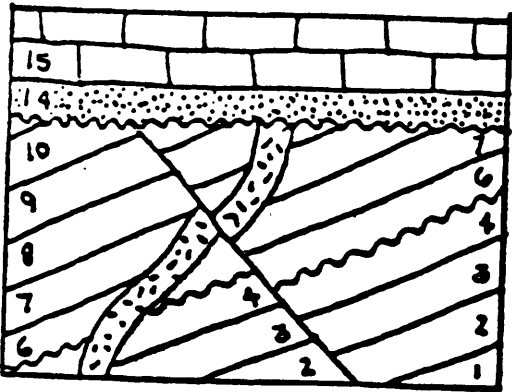
- 6.
- 5.
- 4.
- 3.
- 2.
- 1.

F.



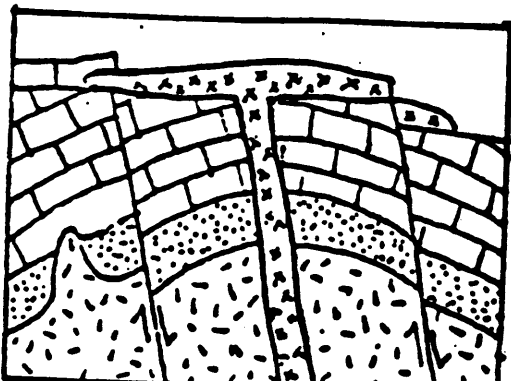
- 6.
- 5.
- 4.
- 3.
- 2.
- 1.

G.



- 6.
- 5.
- 4.
- 3.
- 2.
- 1.

H.



- 6.
- 5.
- 4.
- 3.
- 2.
- 1.